


Down on the Farm

Label the parts of the chicken then colour it in.

Name: _____



beak

tail

head

wings

feet

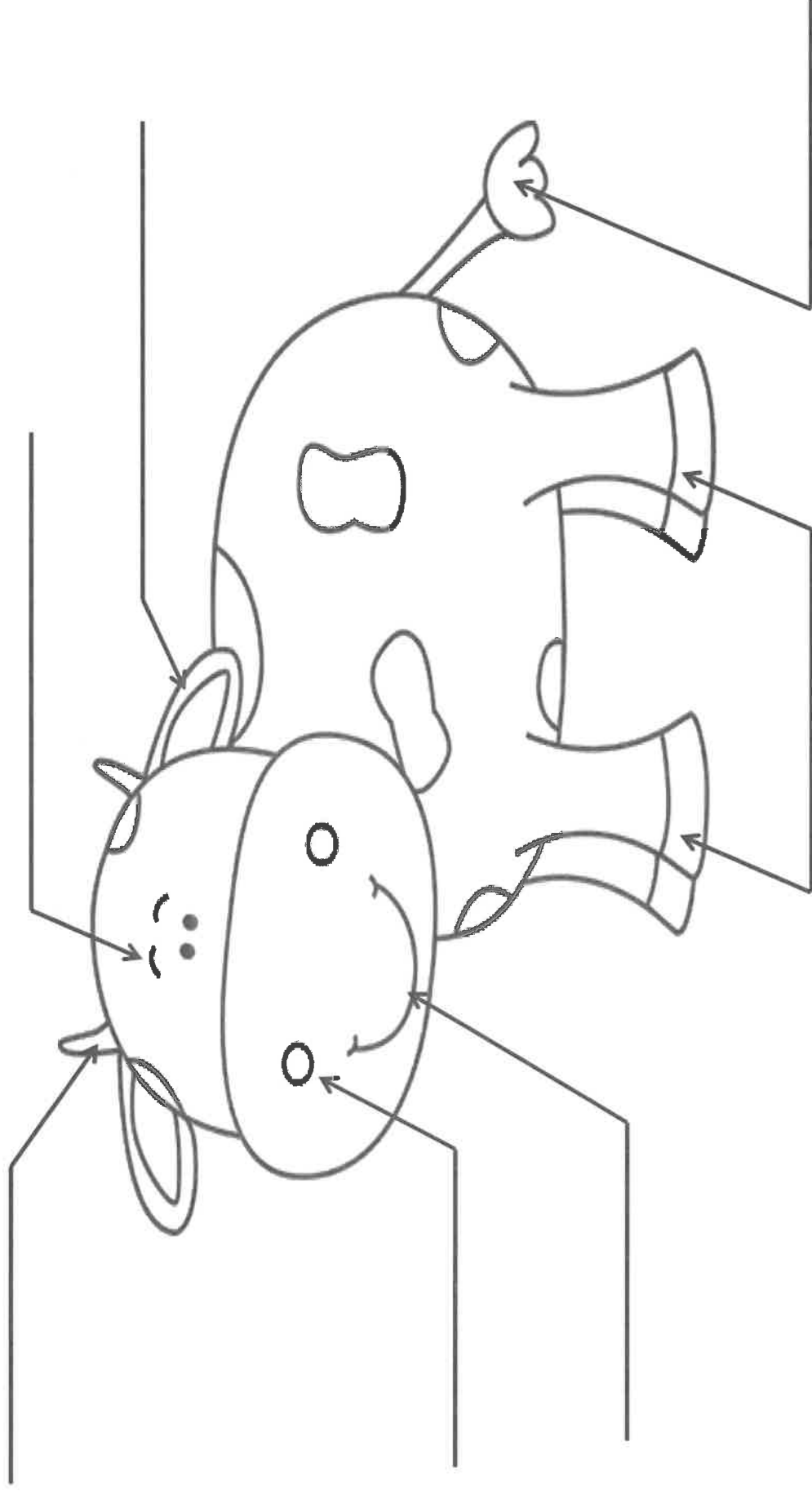
comb

wattle

Down on the Farm

Label the parts of the cow then colour it in.

Name: _____



hooves

tail

head

horns

ears

nose

mouth


Write about and describe the animals in the picture. ^{Week 1, Day 2} 😊

I can spot animals!



I can see a

Pig




A pig has

A pig eats


A pig lives

A pig is



Name _____

My Farm Animal Report



My animal is a _____.

It says " _____!"

It eats _____.

It moves by _____.

* Pick any farm animal and fill out the information.



If I could have any kind of animal on my farm, I would want to raise...

Name: _____

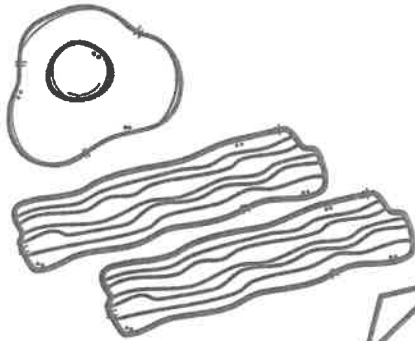
Opinion Writing

Today is: MONDAY TUESDAY WEDNESDAY THURSDAY

FRIDAY SATURDAY SUNDAY

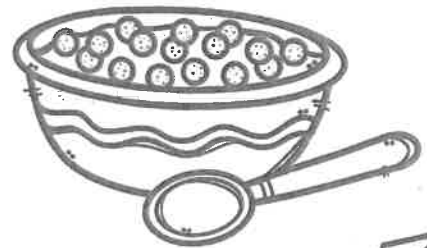
Which food would you rather eat for breakfast?

bacon and eggs



or

cereal



I would rather eat _____

for breakfast than _____

because _____



I used capital letters.



I used spaces.



I used punctuation.

Opinion Writing

Name: _____

Today is:

MONDAY

TUESDAY

WEDNESDAY

THURSDAY

FRIDAY

SATURDAY

SUNDAY

Which sport do you like better?

basketball



or

football



I used capital letters.



I used spaces.



I used punctuation.


Name: _____

Opinion Writing

Today is: MONDAY TUESDAY WEDNESDAY THURSDAY
FRIDAY SATURDAY SUNDAY


If you could ride an animal what would you ride?

elephant



or

giraffe



 I used capital letters.  I used spaces.  I used punctuation.

Name: _____

Picture Prompts

Today is:

MONDAY

TUESDAY

WEDNESDAY

THURSDAY


FRIDAY

SATURDAY

SUNDAY

My Favorite cookie!

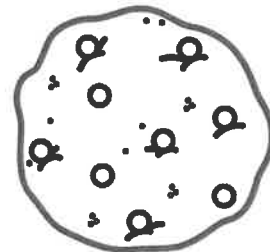
star cookie



gingerbread man
cookie



chocolate chip
cookie





I used capital letters.



I used spaces.



I used punctuation.

Name: _____

OPINION Writing

Today is: MONDAY TUESDAY WEDNESDAY THURSDAY
FRIDAY SATURDAY SUNDAY

Which do you like better? Why?

lemonade



or

strawberry juice



Handwriting practice lines consisting of five sets of three horizontal lines (top solid, middle dashed, bottom solid).



I used capital letters.



I used spaces.



I used punctuation.

Farm Fun


Addition Stories



© 2014 Susan Grady


Farm Fun

Addition Stories



© 2014 Susan Grady


Draw.



Ben sees 3 horses. Jen sees 2 horses.
How many horses do they see in all?

_____ horses

Draw.



Ben sees 3 horses. Jen sees 2 horses.
How many horses do they see in all?

_____ horses


Draw.



Jen feeds 3 pigs. Then she feeds 3 more.
How many pigs does she feed in all?

_____ pigs

Draw.



Jen feeds 3 pigs. Then she feeds 3 more.
How many pigs does she feed in all?

_____ pigs

Draw.



Ben's hen lays 1 egg. Then she lays 2 more eggs. How many eggs does she lay in all?

_____ eggs


Draw.



Ben's hen lays 1 egg. Then she lays 2 more eggs. How many eggs does she lay in all?

_____ eggs


Draw.



Ben sees 5 brown cows. Jen sees 2 white cows. How many cows do they see in all?

_____ COWS

Draw.



Ben sees 5 brown cows. Jen sees 2 white cows. How many cows do they see in all?

_____ COWS

Draw.



Jen has 4 sheep. Ben gives her 3 more sheep. How many sheep does she have in all?

_____ sheep

Draw.



Jen has 4 sheep. Ben gives her 3 more sheep. How many sheep does she have in all?





_____ sheep











Bzzzzy Adding





► Add. Use the code to color each bee.


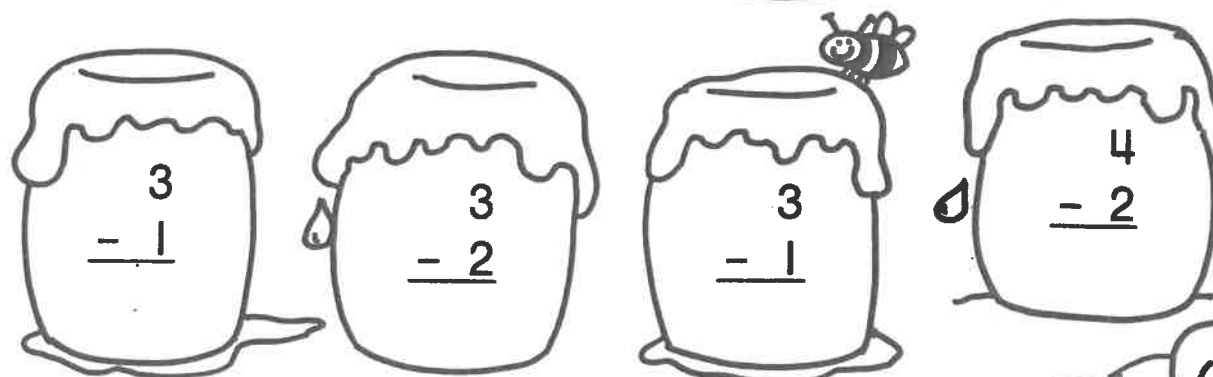
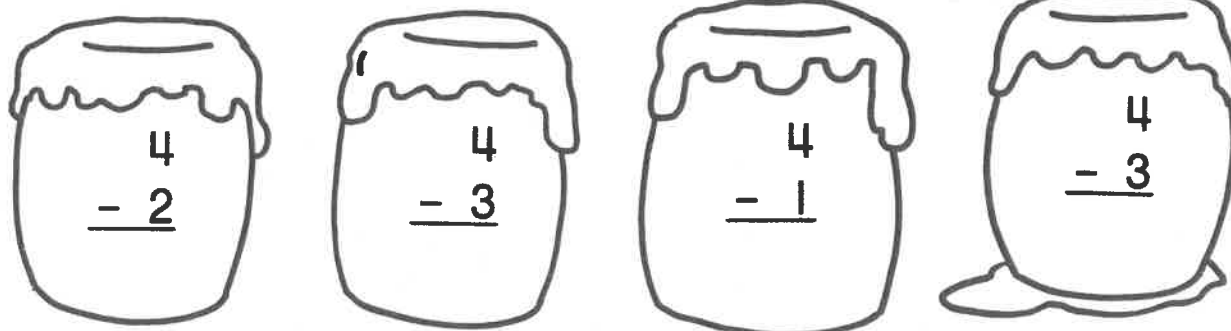
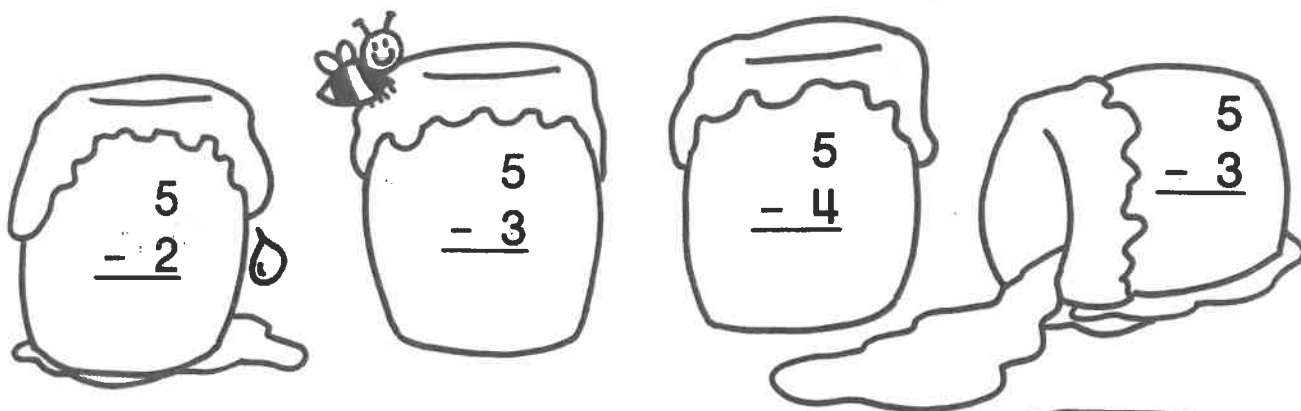
2—red	3—yellow
4—blue	5—green

1. $1 + 2 =$   2. $2 + 3 =$  

3. $3 + 2 =$   4. $3 + 1 =$  

5. $1 + 1 =$   6. $2 + 2 =$  

7. $2 + 1 =$   8. $1 + 3 =$  





Color Code

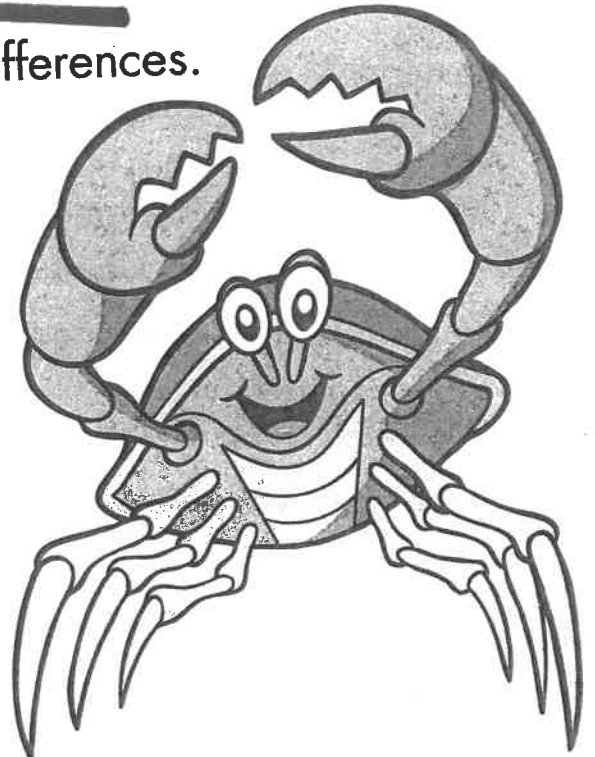
- 1—purple
- 2—brown
- 3—black

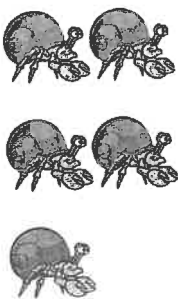
Name _____


Cross out to subtract. Write the differences.


$$\begin{array}{r} 6 \\ -1 \\ \hline \end{array}$$



$$\begin{array}{r} 3 \\ -2 \\ \hline \end{array}$$






$$\begin{array}{r} 5 \\ -3 \\ \hline \end{array}$$


$$\begin{array}{r} 7 \\ -5 \\ \hline \end{array}$$


$$\begin{array}{r} 6 \\ -2 \\ \hline \end{array}$$


$$\begin{array}{r} 6 \\ -4 \\ \hline \end{array}$$



$$\begin{array}{r} 2 \\ -1 \\ \hline \end{array}$$


$$\begin{array}{r} 8 \\ -3 \\ \hline \end{array}$$


Subtracting Another Way


$$\begin{array}{r} 5 \\ -2 \\ \hline \end{array}$$

$$\begin{array}{r} 3 \\ \hline \end{array}$$



Cross out to subtract. Write the differences.


$$\begin{array}{r} 5 \\ -1 \\ \hline \end{array}$$



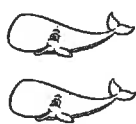
$$\begin{array}{r} 3 \\ -2 \\ \hline \end{array}$$




$$\begin{array}{r} 4 \\ -3 \\ \hline \end{array}$$



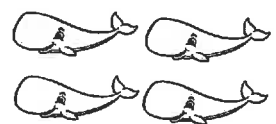
$$\begin{array}{r} 2 \\ -1 \\ \hline \end{array}$$




$$\begin{array}{r} 5 \\ -4 \\ \hline \end{array}$$




$$\begin{array}{r} 4 \\ -2 \\ \hline \end{array}$$




$$\begin{array}{r} 4 \\ -1 \\ \hline \end{array}$$



$$\begin{array}{r} 3 \\ -1 \\ \hline \end{array}$$




$$\begin{array}{r} 5 \\ -3 \\ \hline \end{array}$$



Problem of the Day

Sally had 5 **marbles**. She lost 2 marbles.
How many **marbles** does she have left?



Sally has _____ marbles left.

☐

Picture

☐

Number Sentence

☐

Answer Sentence

☐

Correct Answer

I did it!

Problem of the Day

Joe caught 10 fish. 5 fish got away. How many fish does Joe have now?



$$\underline{\hspace{2cm}} \bigcirc \underline{\hspace{2cm}} = \underline{\hspace{2cm}}$$

Joe has fish left.

☐

Picture

☐

Number Sentence

☐

Answer Sentence


☐

Correct Answer

I did it!

Problem of the Day

There are 9 birds in a tree. 5 birds fly away. How many birds are left?



$$\underline{\hspace{2cm}} \bigcirc \underline{\hspace{2cm}} \bigcirc \underline{\hspace{2cm}}$$

There are _____ birds left.

☐

Picture

☐

Number Sentence

☐

Answer Sentence

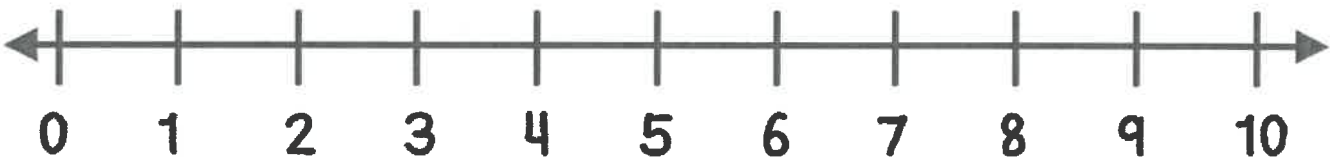
☐

Correct Answer

I did it!

Problem of the Day

Bill caught 10 fish. 4 of them are blue. The rest are red. How many fish are red?



$$\underline{\hspace{2cm}} \bigcirc \underline{\hspace{2cm}} \bigcirc \underline{\hspace{2cm}}$$

There are _____ red fish.

☐

Picture

☐

Number Sentence

☐

Answer Sentence

☐

Correct Answer

I did it!

Problem of the Day

There were 7 apples in a basket. Some fell out. Now there are 3 apples in the basket. How many fell out?



$$\underline{\hspace{2cm}} \bigcirc - \bigcirc = \bigcirc \underline{\hspace{2cm}}$$

 apples fell out.

☐

Picture

☐

Number Sentence

☐

Answer Sentence

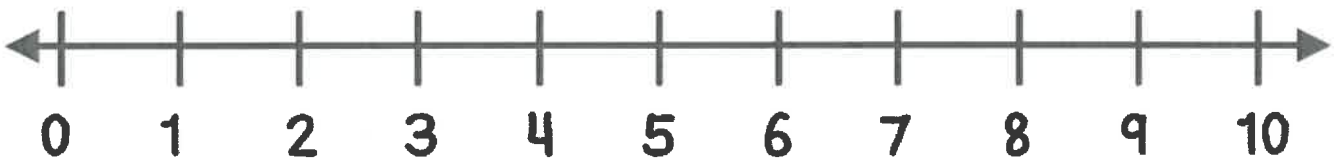
☐

Correct Answer

I did it!

Problem of the Day

There were 8 people in line. Some people left the line. Now there are 5 people in line. How many people left the line?



$$\underline{\hspace{2cm}} \bigcirc \underline{\hspace{2cm}} \bigcirc \underline{\hspace{2cm}}$$

 people left the line.

☐

Picture

☐

Number Sentence

☐

Answer Sentence

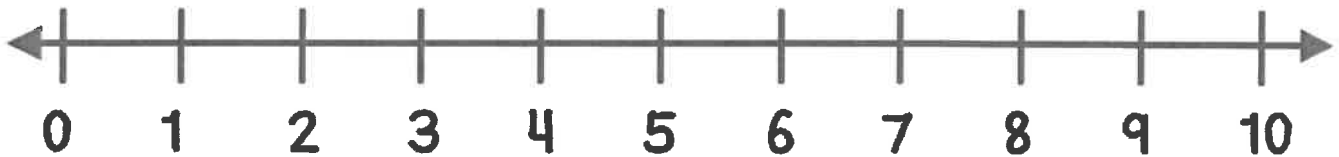
☐

Correct Answer

I did it!

Problem of the Day

Susan has 8 teddy bears. Bobby has 4 teddy bears. How many more teddy bears does Susan have?



_____  _____  _____

Susan has _____ more teddy bears.

☐

Picture

☐

Number Sentence

☐

Answer Sentence

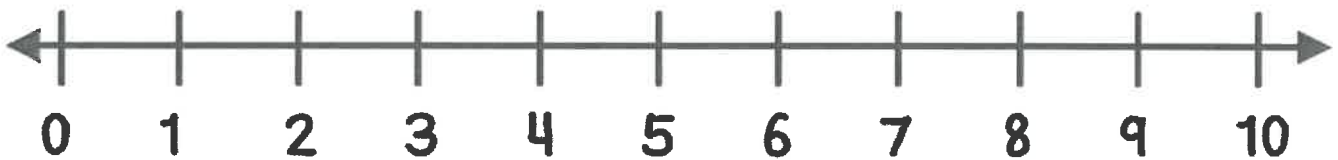
☐

Correct Answer

I did it!

Problem of the Day

Mr. Wise's class earned 9 stars on the chart.
Mrs. Smart's class earned 6 stars. How many
more stars did Mr. Wise's class earn?



$$\underline{\hspace{2cm}} \bigcirc \underline{\hspace{2cm}} \bigcirc \underline{\hspace{2cm}}$$

Mr. Wise's class earned _____ more stars.

☐

Picture

☐

Number Sentence

☐

Answer Sentence

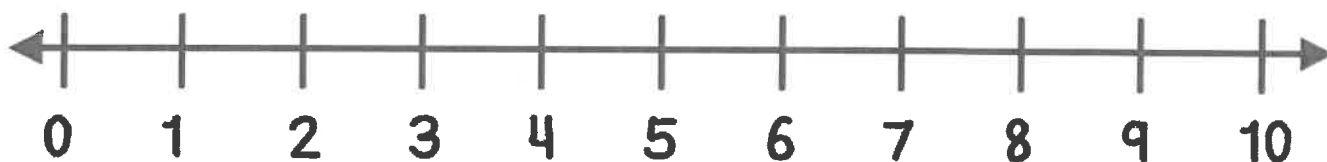

☐

Correct Answer

I did it!

Problem of the Day

Susan needs 7 dollars. She has 2 dollars. How many more dollars does Susan need?



$$\underline{\hspace{2cm}} \bigcirc \underline{\hspace{2cm}} \bigcirc \underline{\hspace{2cm}}$$

The equation is represented by two circles. The first circle contains a minus sign (-) and the second circle contains an equals sign (=). There are horizontal lines on either side of each circle for numbers or expressions.

Susan needs _____ more dollars.

☐

Picture

☐

Number Sentence

☐

Answer Sentence


☐

Correct Answer

I did it!

Farm Fun

Addition Stories



© 2014 Susan Grady


Farm Fun

Addition Stories



© 2014 Susan Grady


Draw.



Ben sees 3 horses. Jen sees 2 horses.
How many horses do they see in all?

5 horses

Draw.



Ben sees 3 horses. Jen sees 2 horses.
How many horses do they see in all?

5 horses


Draw.



Jen feeds 3 pigs. Then she feeds 3 more.
How many pigs does she feed in all?

6 pigs

Draw.



Jen feeds 3 pigs. Then she feeds 3 more.
How many pigs does she feed in all?

6 pigs

Draw.



Ben's hen lays 1 egg. Then she lays 2 more eggs. How many eggs does she lay in all?

3 eggs

Draw.



Ben's hen lays 1 egg. Then she lays 2 more eggs. How many eggs does she lay in all?

3 eggs

Draw.



Ben sees 5 brown cows. Jen sees 2 white cows. How many cows do they see in all?

7 cows

Draw.



Ben sees 5 brown cows. Jen sees 2 white cows. How many cows do they see in all?

7 cows

Draw.



Jen has 4 sheep. Ben gives her 3 more sheep. How many sheep does she have in all?

7 sheep

Draw.



Jen has 4 sheep. Ben gives her 3 more sheep. How many sheep does she have in all?



7 sheep

Bzzzzy Adding



► Add. Use the code to color each bee.



2—red
4—blue



3—yellow
5—green



1. $1 + 2 =$  



2. $2 + 3 =$  



3. $3 + 2 =$  

4. $3 + 1 =$  

5. $1 + 1 =$  

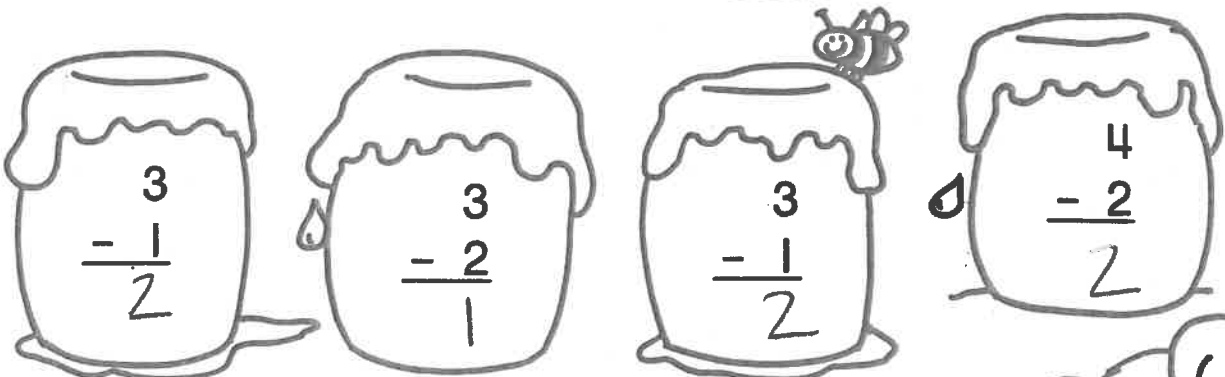
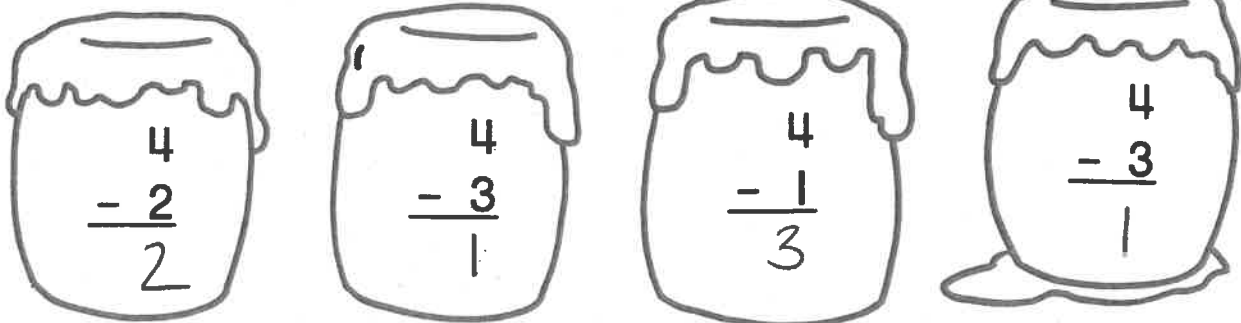
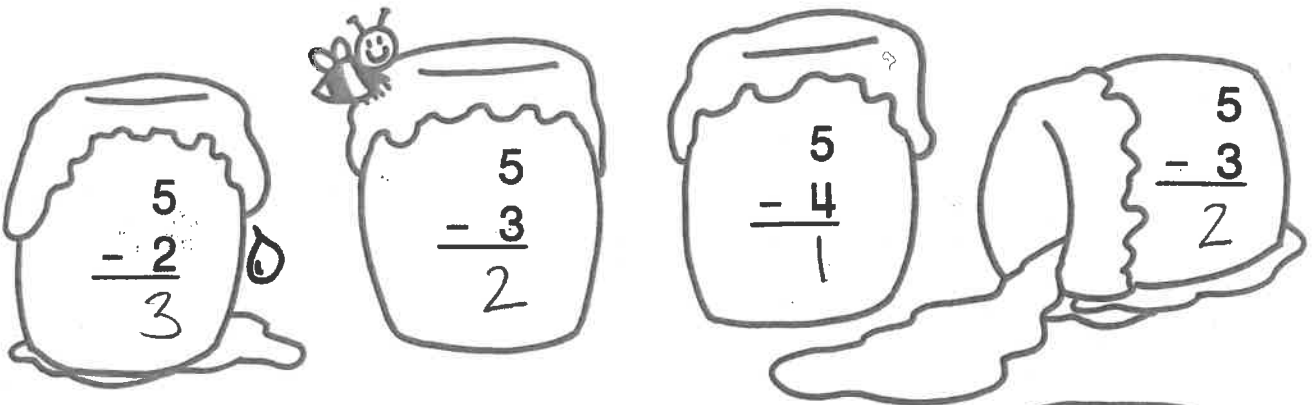
6. $2 + 2 =$  

7. $2 + 1 =$  

8. $1 + 3 =$  

Name _____

Skill: Subtraction from 3, 4, 5



Color Code

1—purple


2—brown


3—black

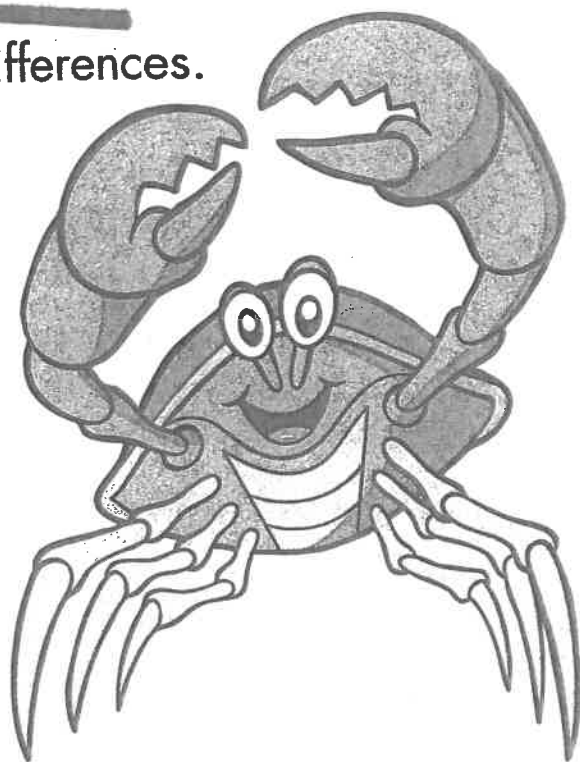


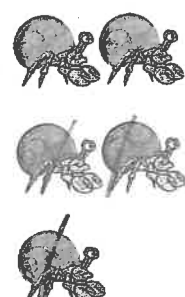
Name _____


Cross out to subtract. Write the differences.


$$\begin{array}{r} 6 \\ -1 \\ \hline 5 \end{array}$$



$$\begin{array}{r} 3 \\ -2 \\ \hline 1 \end{array}$$


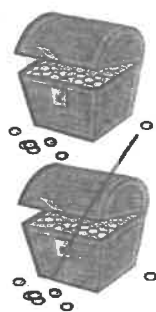



$$\begin{array}{r} 5 \\ -3 \\ \hline 2 \end{array}$$


$$\begin{array}{r} 7 \\ -5 \\ \hline 2 \end{array}$$


$$\begin{array}{r} 6 \\ -2 \\ \hline 4 \end{array}$$



$$\begin{array}{r} 6 \\ -4 \\ \hline 2 \end{array}$$


$$\begin{array}{r} 2 \\ -1 \\ \hline 1 \end{array}$$


$$\begin{array}{r} 8 \\ -3 \\ \hline 5 \end{array}$$



$$\begin{array}{r} 5 \\ -2 \\ \hline \end{array}$$

3




Cross out to subtract. Write the differences.


$$\begin{array}{r} 5 \\ -1 \\ \hline 4 \end{array}$$



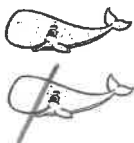
$$\begin{array}{r} 3 \\ -2 \\ \hline 1 \end{array}$$



$$\begin{array}{r} 4 \\ -3 \\ \hline 1 \end{array}$$



$$\begin{array}{r} 2 \\ -1 \\ \hline 1 \end{array}$$




$$\begin{array}{r} 5 \\ -4 \\ \hline 1 \end{array}$$




$$\begin{array}{r} 4 \\ -2 \\ \hline 2 \end{array}$$



$$\begin{array}{r} 4 \\ -1 \\ \hline 3 \end{array}$$



$$\begin{array}{r} 3 \\ -1 \\ \hline 2 \end{array}$$



$$\begin{array}{r} 5 \\ -3 \\ \hline 2 \end{array}$$



Problem of the Day

Sally had 5 marbles. She lost 2 marbles.
How many marbles does she have left?

$$\underline{5} \text{ } \bigcirc - \text{ } \underline{2} \text{ } \bigcirc = \text{ } \underline{3}$$

Sally has 3 marbles left.

☐

Picture

☐

Number Sentence

☐

Answer Sentence

☐

Correct Answer

I did it!

Problem of the Day

Joe caught 10 fish. 5 fish got away. How many fish does Joe have now?

$$\underline{10} \text{ } \bigcirc - \text{ } \underline{5} \text{ } \bigcirc = \text{ } \underline{5}$$

Joe has 5 fish left.

☐

Picture

☐

Number Sentence

☐

Answer Sentence

☐

Correct Answer

I did it!

Problem of the Day

There are 9 birds in a tree. 5 birds fly away. How many birds are left?

$$\underline{9} \bigcirc - \underline{5} \bigcirc = \underline{4}$$

There are 4 birds left.

☐

Picture

☐

Number Sentence

☐

Answer Sentence

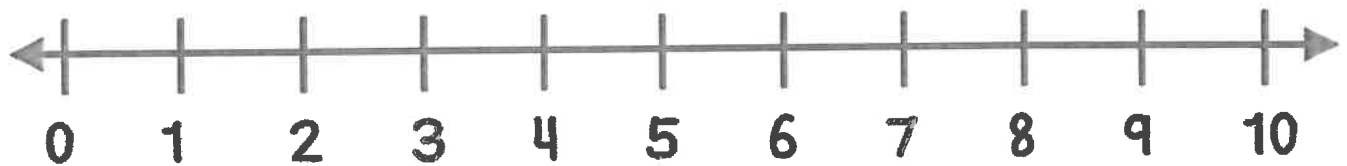

☐

Correct Answer

I did it!

Problem of the Day

Bill caught 10 fish. 4 of them are blue. The rest are red. How many fish are red?



$$\underline{10} \bigcirc - \underline{4} \bigcirc = \underline{6}$$

There are 6 red fish.

☐

Picture

☐

Number Sentence

☐

Answer Sentence

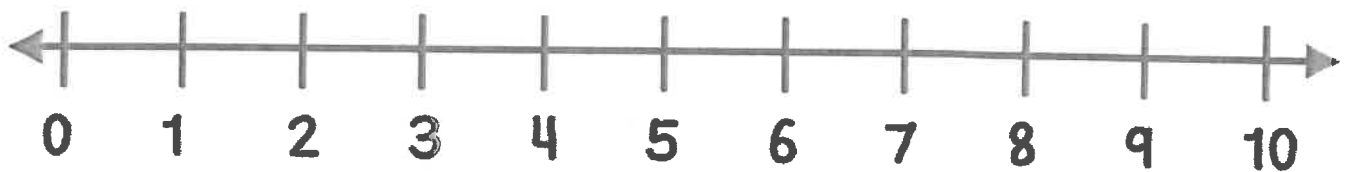
☐

Correct Answer

I did it!

Problem of the Day

There were 7 apples in a basket. Some fell out. Now there are 3 apples in the basket. How many fell out?



$$\underline{7} \bigcirc - \underline{3} \bigcirc = \underline{4}$$

4 apples fell out.

☐

Picture

☐

Number Sentence

☐

Answer Sentence



☐

Correct Answer

I did it!

Problem of the Day

There were 8 people in line. Some people left the line. Now there are 5 people in line. How many people left the line?



$$\underline{8} \bigcirc - \underline{5} \bigcirc = \underline{3}$$

3 people left the line.

☐

Picture

☐

Number Sentence

☐

Answer Sentence


☐

Correct Answer

I did it!

Problem of the Day

Susan has 8 teddy bears. Bobby has 4 teddy bears. How many more teddy bears does Susan have?



$$\underline{8} \text{ } \bigcirc \text{ } \underline{4} \text{ } \bigcirc \text{ } \underline{4}$$

Susan has 4 more teddy bears.

☐

Picture

☐

Number Sentence

☐

Answer Sentence



☐

Correct Answer

I did it!

Problem of the Day

Mr. Wise's class earned 9 stars on the chart.
Mrs. Smart's class earned 6 stars. How many
more stars did Mr. Wise's class earn?



$$\underline{9} - \underline{6} = \underline{3}$$

Mr. Wise's class earned 3 more stars.

☐

Picture

☐

Number Sentence

☐

Answer Sentence



☐

Correct Answer

I did it!

Problem of the Day

Susan needs 7 dollars. She has 2 dollars. How many more dollars does Susan need?



$$\underline{7} - \underline{2} = \underline{5}$$

Susan needs 5 more dollars.

☐

Picture

☐

Number Sentence

☐

Answer Sentence

☐











Correct Answer

I did it!

Name: _____

Short a pictures

Color all the pictures that have a short a sound.



© My Teaching Pal

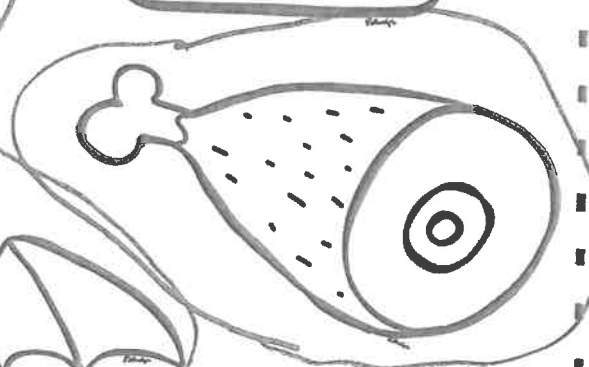
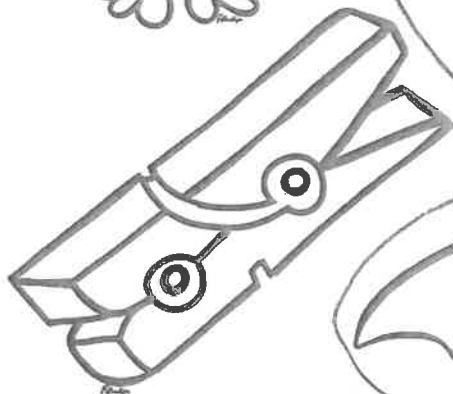

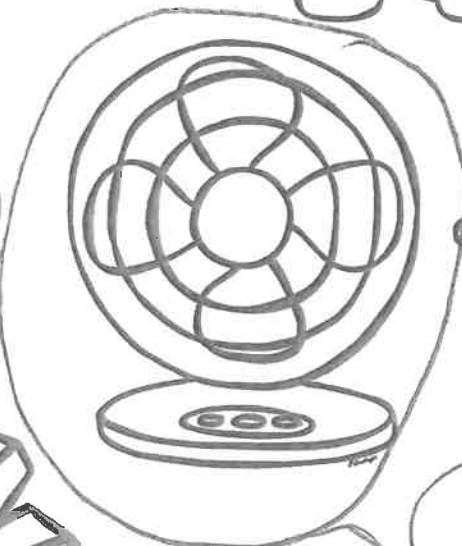



Answer Key on back →

Name: _____

Answer Key

Short a pictures

Color all the pictures that have a short a sound.



Name: _____

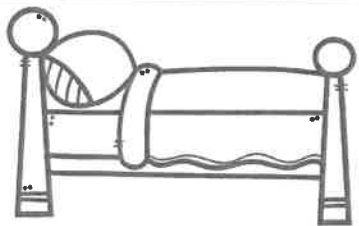
Spell & Find

Spell and find the words.

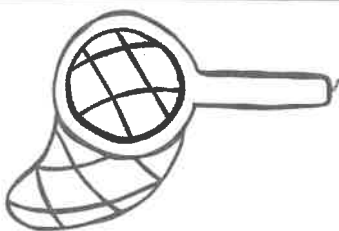


n	e	t	b	p	l
r	f	m	e	j	e
d	s	p	d	l	g
n	g	e	h	c	k
t	e	n	j	e	t

ten
leg
net
pen
bed
jet




--	--	--



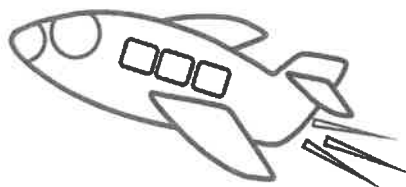
--	--	--



--	--	--



--	--	--



--	--	--

10


--	--	--

Name: _____

Answer Key

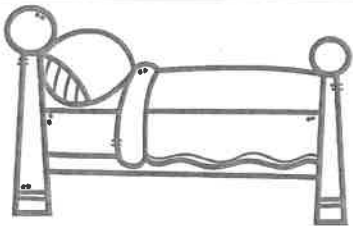
Spell & Find

Spell and find the words.

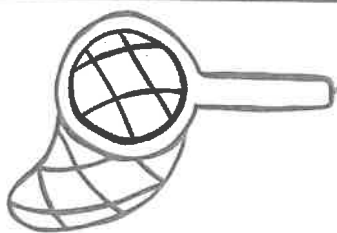


n	e	t	b	p	l
r	f	m	e	j	e
d	s	p	d	l	g
n	g	e	h	c	k
t	e	n	j	e	t

ten ✓
leg ✓
net ✓
pen ✓
bed ✓
jet ✓



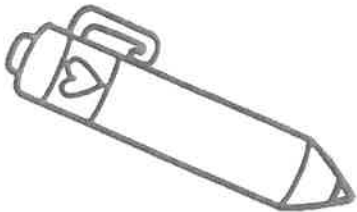
b e d




n e t



l e g



p e n




j e t







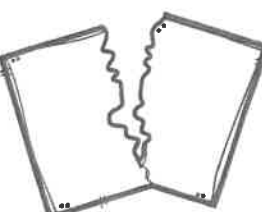





10

t e n

Name: _____


Dab a Family







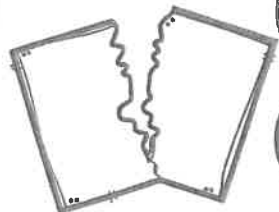







 p ____	ig im it	 l ____	id ip ig	 f ____	in it id
 j ____	in ip id	 w ____	id ig in	 p ____	im in ig
 r ____	ip id ig	 s ____	ip id it	 s ____	im ix ip
 w ____	in im it	 h ____	ip in it	 t ____	ip ig in

Name: _____ Answer Key


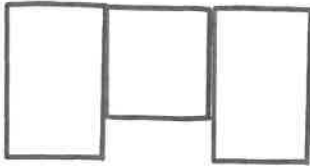

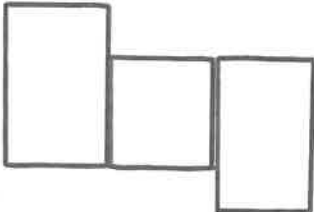

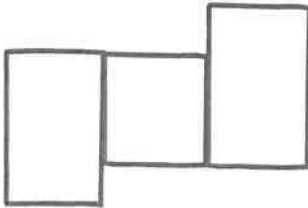

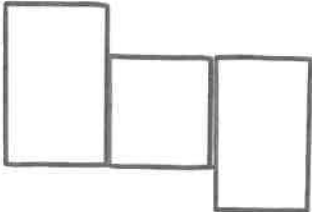

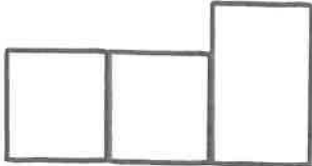

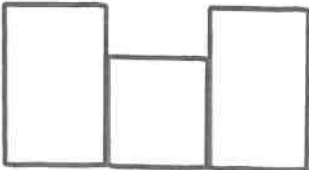
Dab a Family



 <u>p</u> <u>i</u> <u>g</u>	<div>ig</div> <div>im</div> <div>it</div>	 <u>l</u> <u>i</u> <u>p</u>	<div>id</div> <div>ip</div> <div>ig</div>	 <u>f</u> <u>i</u> <u>n</u>	<div>in</div> <div>it</div> <div>id</div>
 <u>l</u> <u>i</u> <u>d</u>	<div>in</div> <div>ip</div> <div>id</div>	 <u>w</u> <u>i</u> <u>g</u>	<div>id</div> <div>ig</div> <div>in</div>	 <u>p</u> <u>i</u> <u>n</u>	<div>im</div> <div>in</div> <div>ig</div>
 <u>r</u> <u>i</u> <u>p</u>	<div>ip</div> <div>id</div> <div>ig</div>	 <u>s</u> <u>i</u> <u>t</u>	<div>ip</div> <div>id</div> <div>it</div>	 <u>s</u> <u>i</u> <u>x</u>	<div>im</div> <div>ix</div> <div>ip</div>
 <u>w</u> <u>i</u> <u>n</u>	<div>in</div> <div>im</div> <div>it</div>	 <u>h</u> <u>i</u> <u>t</u>	<div>ip</div> <div>in</div> <div>it</div>	 <u>t</u> <u>i</u> <u>n</u>	<div>ip</div> <div>ig</div> <div>in</div>

Name: _____







Read, Color, Write

Read it	Color it	Write it
jog		
hop		
pot		
dog		
rob		
hot		

Name: _____

Answer Key

Read, Color, Write

Read it	Color it	Write it
jog		j o g
hop		h o p
pot		p o t
dog		d o g
rob		r o b
hot		h o t

Name: _____

Bubble Words

Color all the short u words.

pin

mat

bug

met

tub

rag

hug

sun

gum

bun

nut

fog

fed

peg

hit

bus

but

cub

lab

not

cut

dot

wig

dud

pun

hub

tab

jut



Name: _____

Answer Key

Bubble words

Color all the short u words.

pin

mat

bug

met

tub

hug

rag

sun

gum

bun

nut

fog

fed

peg

hit

bus

but

cub

lab

not

cut

dot

wig

dud

pun

hub

tab

jut



Name _____

READ and WRITE!

c

ca

cat



cat

b

ba

bat



bat

r

ra

rat



rat

s

sa

sat



sat

m

ma

mat



mat

h

ha

hat



hat

Answers on back →

Name _____

Answer Key

READ and WRITE!

c



ca

cat

cat

cat

b



ba

bat

bat

bat

r



ra

rat

rat

rat

s



sa

sat

sat

sat

m



ma

mat

mat

mat

h



ha

hat

hat

hat

Name: _____

Look at the pictures and
complete the sentences.



The girl hits the ball with
a _ _ _.




He is _ _ _.



The boy _ _ _ on the
mat.



The rat is _ _ _.

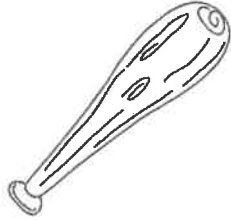


I saw a red _ _ _.

Name: _____

Look at the pictures and
complete the sentences.

Answer Key



The girl hits the ball with
a b a t.




He is m a d.



The boy s a t on the
mat.




The rat is f a t.




I saw a red v a n.

NAME: _____

Color the apples and circle the words in the word search.





m	s	a	d	b	p
c	a	t	b	a	a
f	w	t	x	g	n



Color the pencils and circle the words in the word search.

d	w	b	a	d	p
a	l	m	a	n	a
d	m	s	r	x	t




NAME: _____

Color the apples and circle the words in the word search.


Answer



Key




Color the pencils and circle the words in the word search.



Name: _____




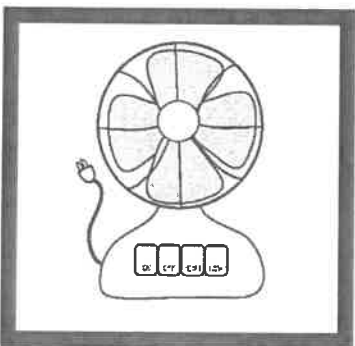

Look at each picture and write the word.



--	--	--

--	--	--



--	--	--



--	--	--

--	--	--

--	--	--



--	--	--

--	--	--

--	--	--

Name: _____

Answer Key 

Look at each picture and write the word.



s a d



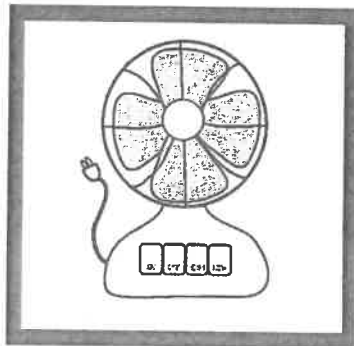
b a t




c a n




d a d



f a n



r a t



h a m




h a t




j a m

Name: _____


word search



○ bug ○ pot ○ ten
○ can ○ map ○ sun
○ pig ○ hat ○ leg
○ cop ○ cup ○ bin



word search



Name: _____



Trace and Write



now

Color



now

Find it

now

not

now

new

now

now

no

now

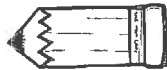
Write it in a sentence 

We will go to lunch _____.

Name: _____



Trace and Write



how

Color



how

Find it

how

how

use

her

how

put

the

how

Write it in a sentence



_____ many students are there?

Name: _____



Trace and Write



put

Color



put

Find it

put	poor	girl	put
more	put	put	any

Write it in a sentence 

I can _____ the puzzle together.

Name: _____



Trace and Write



said

Color



said

Find it

said

does

girl

said

says

said

more

said

Write it in a sentence



She _____, "I will go play".


ZOOM CHEAT SHEET

ZOOM is a platform where we can interact online.


Do you want to allow this page to open "zoom.us"?

Cancel Allow

We will send you a link with the date and time for our ZOOM sessions. Allow and join with audio.



Access from a desktop, laptop, iPad, or from a phone. If accessing from a phone, you must have the ZOOM app.




Speaker view allows you to only see the speaker. Gallery view allows you to see the whole class. (If on mobile, you swipe to the right to see the gallery view). Gallery View is suggested.

Participant box. You can control your volume and camera as well as see who is there.

Chat box. You can chat here. Make sure it is set to everyone. (Mobile it's on the bottom menu).

Use the bar at the bottom to control your sound and video. You can also click to view the chat box and participant box.

To change your name, hit the three dots on your video.



ZOOM TIPS & ETIQUETTE: consider having headphones - please mute yourself when you are not talking - when participating remember your video is streaming to others - please help keep students on task and not being silly – headphones can help with feedback / noise


Cómo usar ZOOM

ZOOM es una plataforma donde podemos interactuar en línea

Do you want to allow this page to open "zoom.us"?

Cancel Allow

Le enviaremos un enlace con la fecha y la hora para nuestras sesiones de ZOOM. Permita el audio.



Acceso desde una computadora, iPad o desde un teléfono. Si accedes desde un teléfono, debes tener la aplicación ZOOM.



La vista parlante le permite ver sólo la persona que está hablando. La vista de la galería le permite ver toda la clase. (En móvil pasa a la derecha para ver).

Caja de participantes. Puedes controlar el volumen y la cámara, así como ver quién está ahí.

Caja de chat. Puedes chatear aquí. Asegúrate de que está configurado para todos. (Móvil: en el menú inferior).

Usa el menú de la parte inferior para controlar el sonido y el video. También puedes hacer clic para ver el cuadro de chat y el cuadro de participante.

Para cambiar tu nombre, pulsa los tres puntos de tu video.



CONSEJOS Y ETIQUETA: Por favor, silévese cuando no esté hablando - cuando participe recuerde que su video se está transmitiendo a otros - por favor, ayude a mantener a los estudiantes en la tarea y no ser tonto - los audífonos pueden ayudar con la retroalimentación / ruido.

